














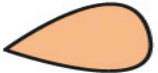
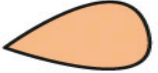
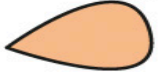


ACTIVIDADES

- ✓ Observa estas flores. Cuenta los pétalos y escribe los números que faltan.
- ✓ Resuelve las restas.

	$\underline{\quad}$		$\underline{\quad}$	
	$\underline{\quad}$		$\underline{\quad}$	

	$\underline{\quad}$		$\underline{\quad}$	
	$\underline{\quad}$		$\underline{\quad}$	

	$\underline{\quad}$		$\underline{\quad}$	
	$\underline{\quad}$		$\underline{\quad}$	

¿Cómo lo he hecho?

